



# DELHI PUBLIC SCHOOL FIROZABAD

(UNDER THE AEGIS OF DELHI PUBLIC SCHOOL SOCIETY EAST OF KAILASH NEW DELHI)

(A SENIOR SECONDARY SCHOOL)

AFFILIATED TO CBSE, AFFILIATION NO. 2133064 SCHOOL NO: 61225



Class : IV

Name: \_\_\_\_\_

Subject : Logo programming

Roll No.: \_\_\_\_\_

MM: 20

## I. Answer the following question:

2x20=20

Q1: Write the key points of Logo?

Ans: \_\_\_\_\_  
\_\_\_\_\_  
\_\_\_\_\_

Q2: Introduce LOGO in three points ?

Ans: \_\_\_\_\_  
\_\_\_\_\_  
\_\_\_\_\_

Q3: Write the function of PRINT command?

Ans: \_\_\_\_\_  
\_\_\_\_\_

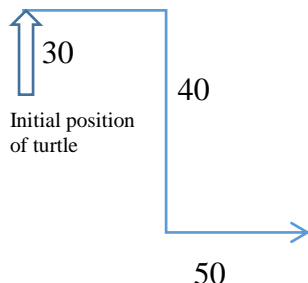
Q4: Write the INPUTS of given OUTPUTS ?

(a) 1080 : \_\_\_\_\_

(b) my roll number is 50 : \_\_\_\_\_

(c) 55 black 90 berries : \_\_\_\_\_

Q5: Write the logo commands for below figure?




Commands : \_\_\_\_\_

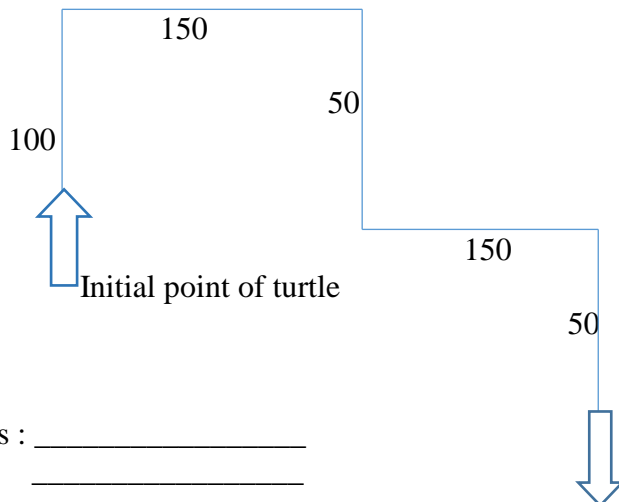
\_\_\_\_\_  
\_\_\_\_\_  
\_\_\_\_\_  
\_\_\_\_\_  
\_\_\_\_\_

Q6: Draw the figure for below commands in the given box.

```
fd 100  
rt 90  
fd 200  
rt 90  
fd 80  
rt 90  
fd 100  
rt 90  
fd 50
```




Q7: Write the logo commands for below figure?



Commands : \_\_\_\_\_  
\_\_\_\_\_  
\_\_\_\_\_  
\_\_\_\_\_  
\_\_\_\_\_  
\_\_\_\_\_  
\_\_\_\_\_  
\_\_\_\_\_

Q8: Write a program for below image of SQUARE by using REPEAT command.



Command : \_\_\_\_\_

Q9: Write of function of DEBUG?

Ans: \_\_\_\_\_  
\_\_\_\_\_

Q10: Write down the function of below CONTROL BUTTONS?

(a)Halt : \_\_\_\_\_

(b)Trace : \_\_\_\_\_

(c)Status : \_\_\_\_\_

(d)Pause : \_\_\_\_\_

(e)Execute : \_\_\_\_\_

